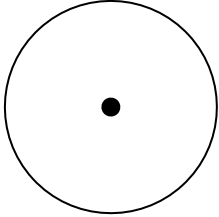
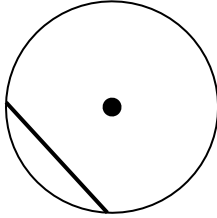
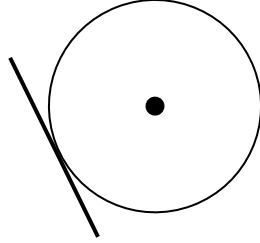
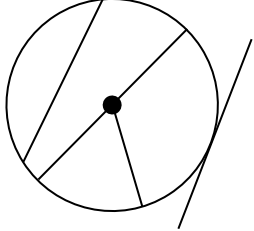
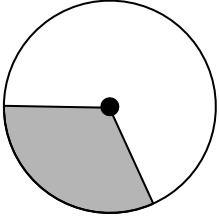
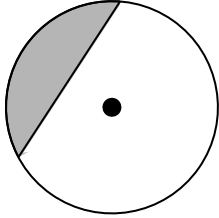
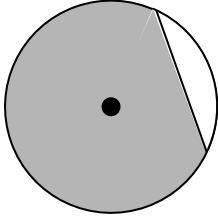

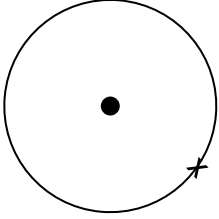
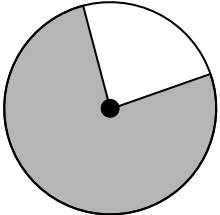






THE CIRCLE

PARTS OF A CIRCLE

Ref: G514. **1S1**

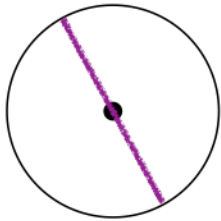
<p>A1 Draw a diameter:</p> 	<p>A2 What line joins two points on the circumference?</p> 	<p>A3 What line touches a circle at only one point?</p> 	<p>A4 Use colour to show the circumference:</p> 
<p>B1 Give the name of the shaded region:</p> 	<p>B2 Give the name of the shaded region:</p> 	<p>B3 Give the name of the shaded region:</p> 	<p>B4 Draw a radius:</p> 
<p>C1 Draw the tangent at point T:</p> 	<p>C2 Give the name of the shaded region:</p> 	<p>C3 Draw and shade a minor segment:</p> 	<p>C4 Draw and shade a major sector:</p> 




THE CIRCLE PARTS OF A CIRCLE

Ref: G514. **1S1**

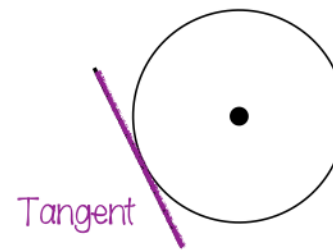
A1 Draw a diameter:



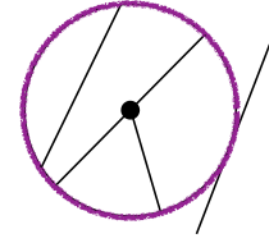
A2 What line joins two points on the circumference?



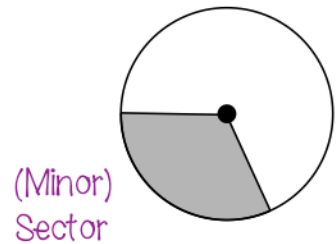
A3 What line touches a circle at only one point?




A4 Use colour to show the circumference:



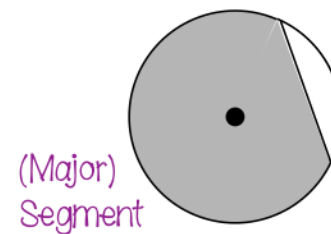
B1 Give the name of the shaded region:



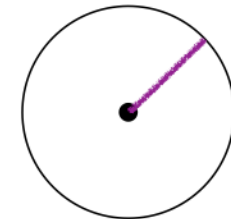
B2 Give the name of the shaded region:



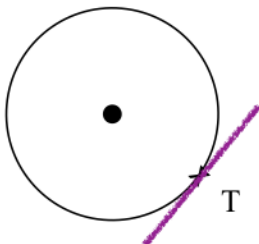
B3 Give the name of the shaded region:



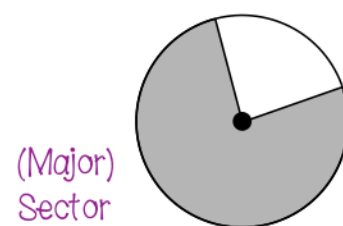
B4 Draw a radius:



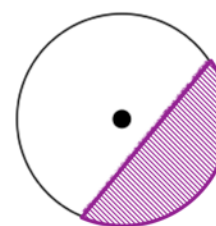
C1 Draw the tangent at point T:



C2 Give the name of the shaded region:



C3 Draw and shade a minor segment:



C4 Draw and shade a major sector:

